

ESCOLA MUNICIPAL MARIA SIQUEIRA DE PAULA

Nome do aluno:

Semana:30

Professora: Neili da Silva Moreira

SEGUE

Turmas: 2º Ano

Atividade de intensificação da
aprendizagem








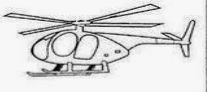



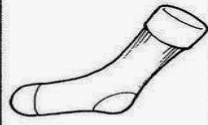











Componente Curricular: Língua Portuguesa

Entrega: Foto/vídeo/
Atividade impressa



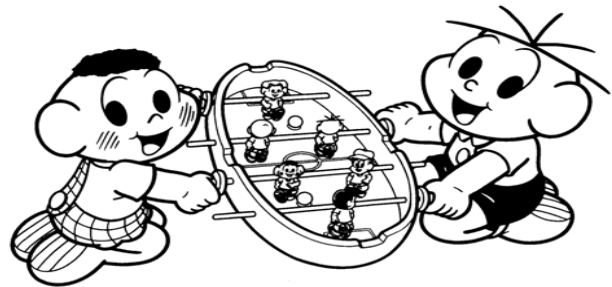
Componente Curricular: Matemática

OBSERVE AS FIGURAS. COM AUXÍLIO DO PROFESSOR, ESCREVA A LETRA INICIAL DO NOME DE CADA UMA DELAS.

					
<input type="text"/>	<input type="text"/>	<input type="text"/>	<input type="text"/>	<input type="text"/>	<input type="text"/>
					
<input type="text"/>	<input type="text"/>	<input type="text"/>	<input type="text"/>	<input type="text"/>	<input type="text"/>
					
<input type="text"/>	<input type="text"/>	<input type="text"/>	<input type="text"/>	<input type="text"/>	<input type="text"/>
					
<input type="text"/>	<input type="text"/>	<input type="text"/>	<input type="text"/>	<input type="text"/>	

MATEMÁTICA

CASCÃO E CEBOLINHA POSSUEM MUITOS BRINQUEDOS.
VAMOS CONTAR QUANTOS TIPOS DE BRINQUEDOS HÁ NA
ESTANTE E, EM SEGUIDA, COMPLETAR AS OPERAÇÕES?





a)  +  =

f)  +  =



b)  +  =



g)  +  =



c)  +  =

h)  +  =

d)  +  =

i)  +  =

e)  +  =

j)  +  =